


Lesson 41



1. A total of 17 goldfish are being given away as prizes at the school carnival. If 6 of the goldfish are orange and the rest are yellow, how many of the goldfish are yellow?

_____ of the goldfish are yellow.

2. $12 + 7 =$
 3. $15 + \underline{\quad} = 17$
 4. $18 - 6 =$



5. Draw the missing rocks in the box to complete the pattern.

**Lesson 42**

1. $42 + 26 =$
 2. Write the missing numbers to complete the pattern.

45, 40, 35, 30, _____, _____, 15, 10

3. Dana's dog has 18 bones. Her dog buries 4 bones. How many bones does her dog have now?

The dog has _____ bones.

4. $14 - 12 =$
 5. Count by 10s.

10, _____, _____, 40, 50, _____, _____, _____, _____, 100

